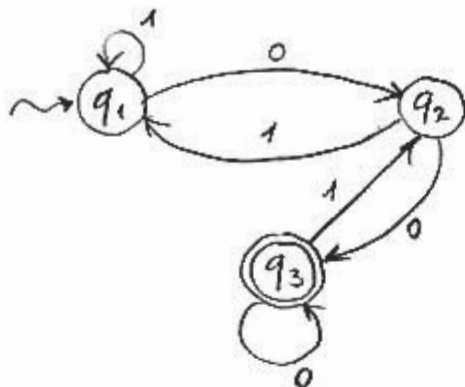


Exercise (3.2.1 from textbook)

E 3.1

Given the following DFA:



- (a) give all regular expressions $R_{ij}^{(0)}$
- (b) " " " " $R_{ij}^{(1)}$, simplifying as much as possible
- (c) " " " " $R_{ij}^{(2)}$, " " " " "
- (d) give a regular expression for the language of the automaton
- (e) starting from the diagram above, give a regular expression for the language by eliminating state q_2 .

solution (a)

- $R_{11}^{(0)} = 1 + \epsilon$
- $R_{12}^{(0)} = 0$
- $R_{13}^{(0)} = \emptyset$
- $R_{21}^{(0)} = 1$
- $R_{22}^{(0)} = \epsilon$
- $R_{23}^{(0)} = 0$
- $R_{31}^{(0)} = \emptyset$
- $R_{32}^{(0)} = 1$
- $R_{33}^{(0)} = 0 + \epsilon$

Remember:

$$R_{ij}^{(k)} = R_{ij}^{(k-1)} + R_{ik}^{(k-1)} (R_{kk}^{(k-1)})^* R_{kj}^{(k-1)}$$

solution (b)

$$R_{11}^{(1)} = R_{11}^{(0)} + R_{11}^{(0)} \cdot (R_{11}^{(0)})^* \cdot R_{11}^{(0)} + R_{11}^{(0)} = (1+\epsilon) + (1+\epsilon)(1+\epsilon)^*(1+\epsilon) = 1+\epsilon + 1^* = 1^*$$

$$R_{12}^{(1)} = R_{12}^{(0)} + R_{11}^{(0)} \cdot (R_{11}^{(0)})^* \cdot R_{12}^{(0)} = 0 + (1+\epsilon) \cdot (1+\epsilon)^* \cdot 0 = 0 + 1^* \cdot 0 = 1^* \cdot 0$$

$$R_{13}^{(1)} = R_{13}^{(0)} + R_{11}^{(0)} \cdot (R_{11}^{(0)})^* \cdot R_{13}^{(0)} = \emptyset$$

$$R_{21}^{(1)} = R_{21}^{(0)} + R_{21}^{(0)} \cdot (R_{11}^{(0)})^* \cdot R_{11}^{(0)} = 1 + 1 \cdot (1+\epsilon)^* \cdot (1+\epsilon) = 11^*$$

$$R_{22}^{(1)} = R_{22}^{(0)} + R_{21}^{(0)} \cdot (R_{11}^{(0)})^* \cdot R_{12}^{(0)} = \epsilon + 1 \cdot (1+\epsilon)^* \cdot 0 = \epsilon + 11^* \cdot 0$$

$$R_{23}^{(1)} = R_{23}^{(0)} + R_{21}^{(0)} \cdot (R_{11}^{(0)})^* \cdot R_{13}^{(0)} = 0 + 1 \cdot (1+\epsilon)^* \cdot \emptyset = 0$$

$$R_{31}^{(1)} = R_{31}^{(0)} + R_{31}^{(0)} \cdot (R_{11}^{(0)})^* \cdot R_{11}^{(0)} = \emptyset + \emptyset = \emptyset$$

$$R_{32}^{(1)} = R_{32}^{(0)} + R_{31}^{(0)} \cdot (R_{11}^{(0)})^* \cdot R_{12}^{(0)} = 1 + \emptyset = 1$$

$$R_{33}^{(1)} = R_{33}^{(0)} + R_{31}^{(0)} \cdot (R_{11}^{(0)})^* \cdot R_{13}^{(0)} = (0+\epsilon) + \emptyset = 0+\epsilon$$

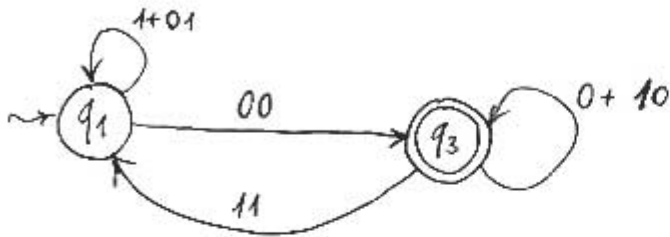
(c), (d)

[THE REST IS LEFT AS HOMEWORK]

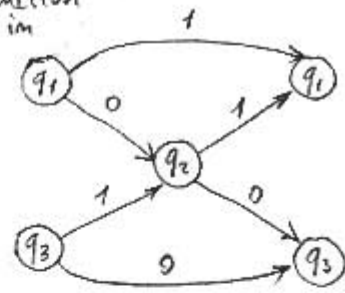
Solution (e)

€ 3.3

Elimination of state q_2 :



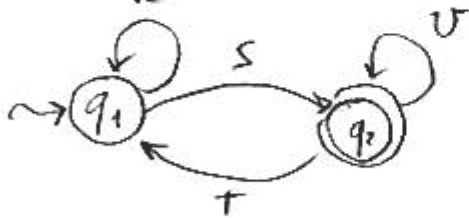
Construction that helps in exercise:



$$E = ((1+01) 00 (0+10)^* 11)^* 00 (0+10)^*$$

final regular expression

Remember :



leads to expression

$$(R^* + SUT^*)^* S U^*$$


Exercise (3.2.4 from textbook)

€ 3.4

Convert the following regular expressions to ϵ -NFA's :

- (a) 01^*
- (b) $(0+1)01$
- (c) $00(0+1)^*$

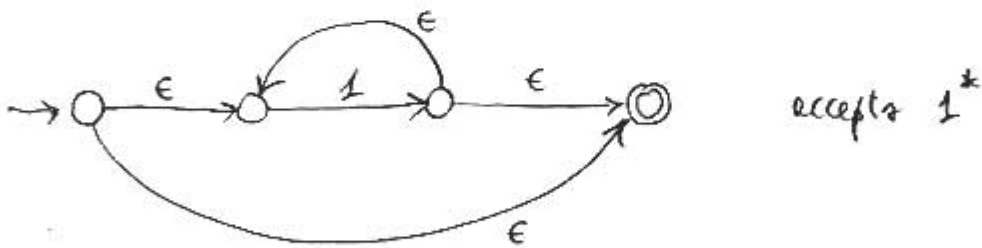
solution (a)



accepts 0

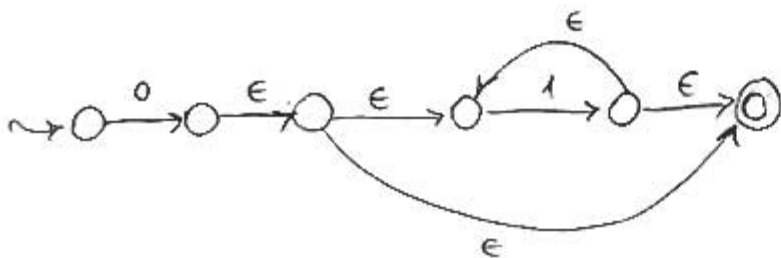


accepts 1



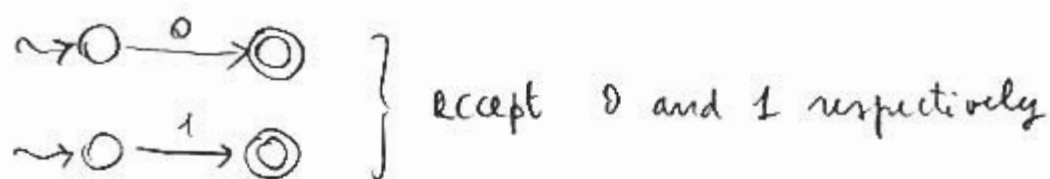
accepts 1^*

Final automaton :



Solution (b)

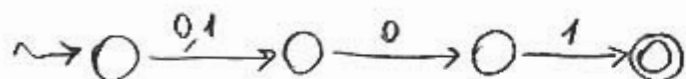
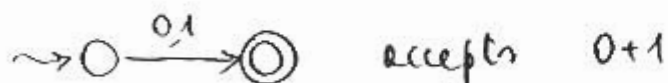
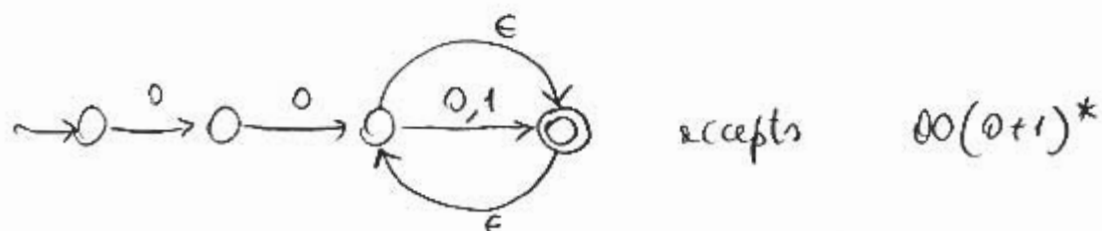
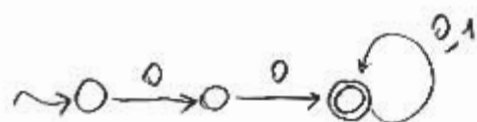
E 3.5



Merging starting and accepting states:



Merging final state of the first automaton and initial state of the second (see Exercise 3.2.7 from textbook) for concatenation:

Solution (c)From the latter, we add ϵ -transitions from starting state to accepting state and vice-versa (exercise 3.2.7 from textbook):We can make the two rightmost states (with respect to the figure) collapse, thus eliminating the residual ϵ -transitions:

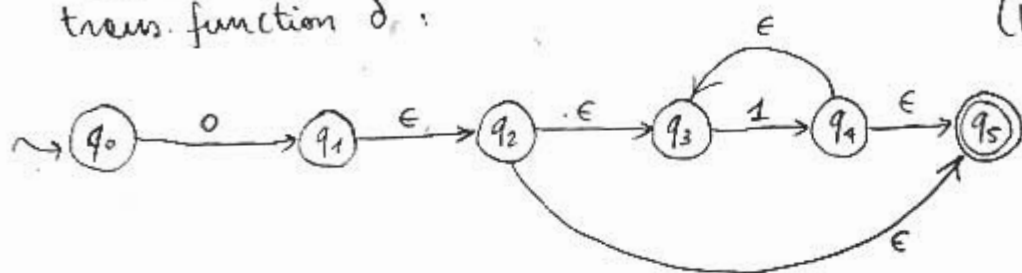
Exercise (3.2.5 from textbook)

€ 3.6

Eliminate ϵ -transitions from automata constructed in Exercise 3.2.4 from textbook.

solution (a)

Initial automaton with trans. function δ :



Remember:

$$\delta_N(q, a) = \text{Eclose} \left(\bigcup_{p \in \text{Eclose}(q)} \{\delta(p, a)\} \right)$$

(plus considering initial state as accepting, if needed)

DEF.

$$\text{Eclose}(\{q_1, \dots, q_m\}) = \bigcup_{1 \leq i \leq m} \text{Eclose}(q_i)$$

$$\delta_N(q_0, 0) = \text{Eclose} \left(\bigcup_{p \in \{q_0\}} \delta(p, 0) \right) = \text{Eclose}(\delta(q_0, 0)) =$$

$$= \text{Eclose}(\{q_1\}) = \{q_1, q_2, q_3, q_5\}$$

$$\delta_N(q_0, 1) = \text{Eclose}(\delta(q_0, 1)) = \emptyset$$

$$\delta_N(q_1, 0) = \text{Eclose} \left(\bigcup_{p \in \{q_1, q_2, q_3, q_5\}} \delta(p, 0) \right) =$$

$$= \text{Eclose}(\delta(q_1, 0) \cup \delta(q_2, 0) \cup \delta(q_3, 0) \cup \delta(q_5, 0)) =$$

$$= \text{Eclose}(\emptyset \cup \emptyset \cup \emptyset \cup \emptyset) = \emptyset$$

$$\delta_N(q_1, 1) = \text{Eclose}(\delta(q_1, 1) \cup \delta(q_2, 1) \cup \delta(q_3, 1) \cup \delta(q_5, 1)) =$$

$$= \text{Eclose}(\emptyset \cup \emptyset \cup \{q_4\} \cup \emptyset) = \{q_4, q_5, q_3\}$$

$$\delta_N(q_2, 0) = \text{Eclose}(\delta(q_2, 0) \cup \delta(q_3, 0) \cup \delta(q_5, 0)) =$$

$$= \text{Eclose}(\emptyset \cup \emptyset \cup \emptyset) = \emptyset$$

$$\delta_N(q_2, 1) = \text{Eclose}(\delta(q_2, 1) \cup \delta(q_3, 1) \cup \delta(q_5, 1)) =$$

$$= \text{Eclose}(\emptyset \cup \{q_4\} \cup \emptyset) = \{q_4, q_5, q_3\}$$

$\delta_{\epsilon}^*(q_3, 0) = \text{Eclose}(\delta(q_3, 0)) = \emptyset$

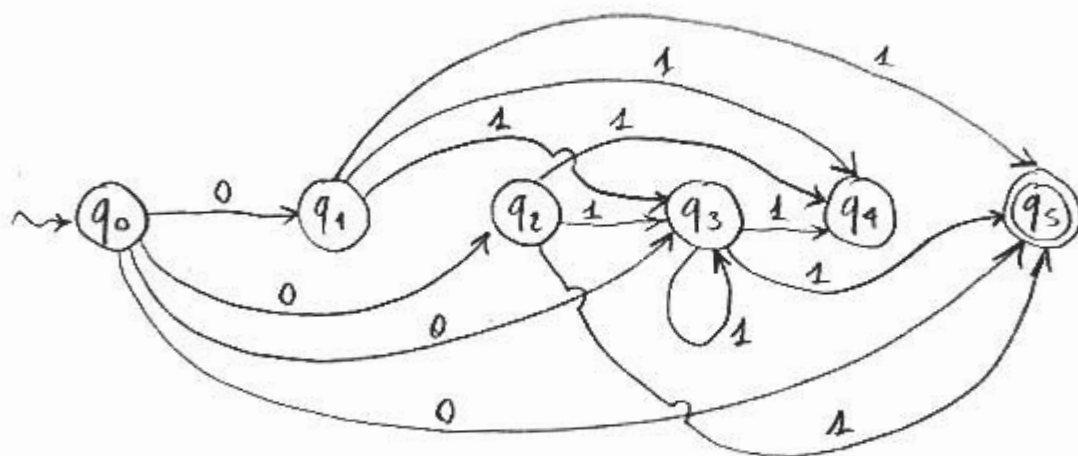
$\delta_{\epsilon}^*(q_3, 1) = \text{Eclose}(\delta(q_3, 1)) = \text{Eclose}(q_4) = \{q_4, q_5, q_3\}$

$\delta_{\epsilon}^*(q_4, 0) = \text{Eclose}(\delta(q_4, 0) \cup \delta(q_5, 0)) = \text{Eclose}(\emptyset \cup \emptyset) = \emptyset$

$\delta_{\epsilon}^*(q_4, 1) = \emptyset$ (as in previous step)

$\delta_{\epsilon}^*(q_5, 0) = \emptyset$ (trivial)

$\delta_{\epsilon}^*(q_5, 1) = \emptyset$ (trivial)



Notice that it is extremely redundant.

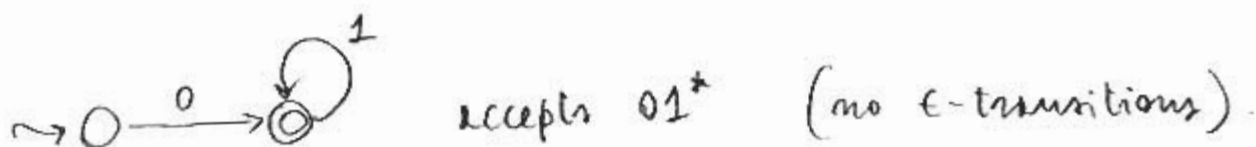
By applying merging of states as in cases (b) and (c), we would have immediately obtained the following:



accepts 0



accepts 1*



accepts 01* (no ϵ -transitions).